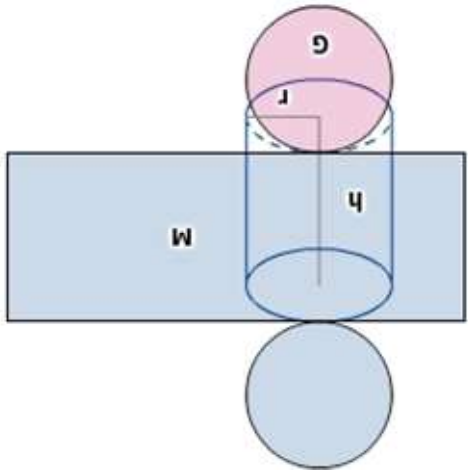
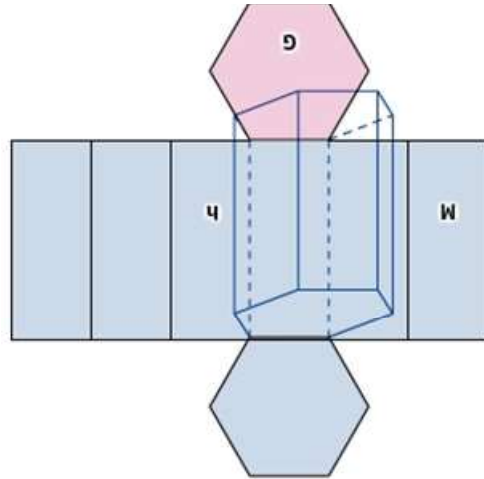


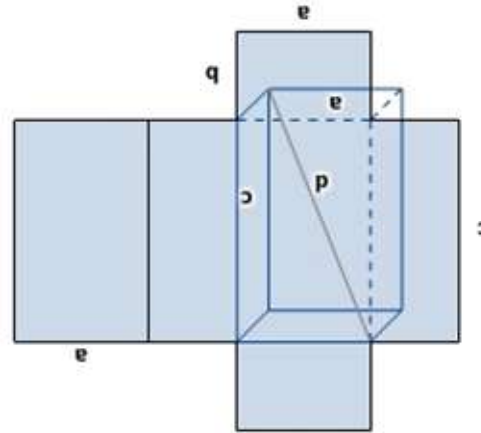
_____ = O
 _____ = M
 _____ = A



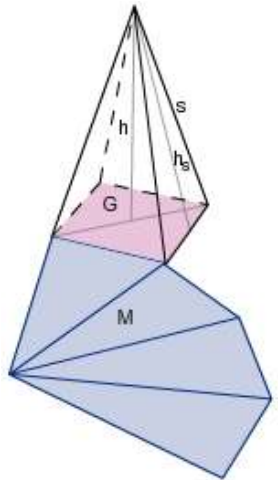
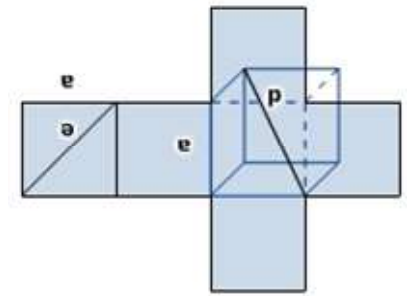
_____ = O
 _____ = M
 _____ = A



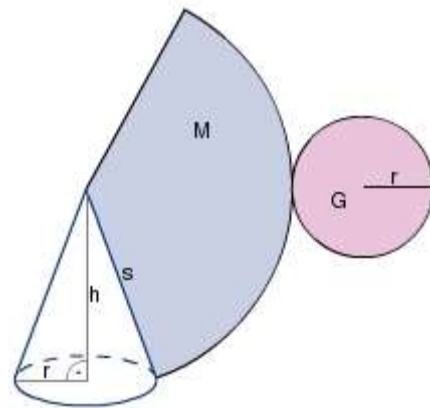
_____ = O
 _____ = A



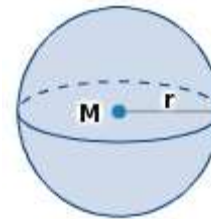
_____ = O
 _____ = A



$V =$ _____
 $M =$ _____
 $O =$ _____



$V =$ _____
 $M =$ _____
 $O =$ _____



$V =$ _____
 $O =$ _____

Formelsammlung:

**Volumen und Oberflächeninhalt
 ausgewählter Körper**

Name: _____